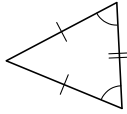
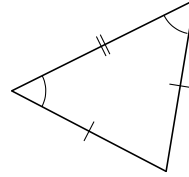


Pauta Clasificación de triángulos D

Clasifique los siguientes triángulos según la medida de sus lados.



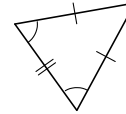
isósceles



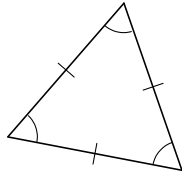
isósceles



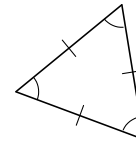
escaleno



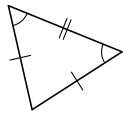
isósceles



equilátero



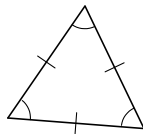
equilátero



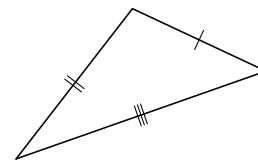
isósceles



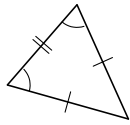
isósceles



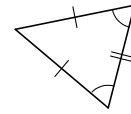
equilátero



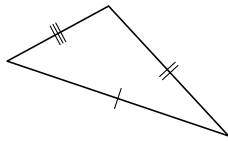
escaleno



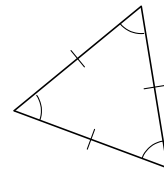
isósceles



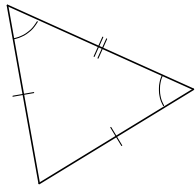
isósceles



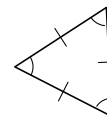
escaleno



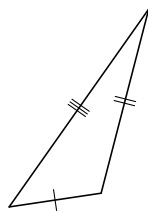
equilátero



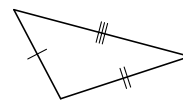
isósceles



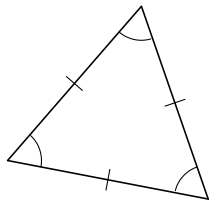
equilátero



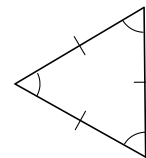
isósceles



escaleno



equilátero



equilátero