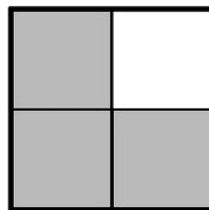


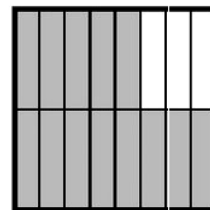
PAUTA: COMPARACIÓN DE FRACCIONES

Escribe el símbolo $<$, $>$ según corresponda

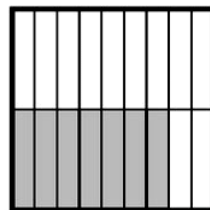
(Fracciones con distinto numerador y denominador)



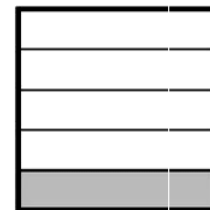
$\frac{3}{4}$




$\frac{13}{16}$




$\frac{7}{18}$




$\frac{1}{5}$




$\frac{3}{10}$



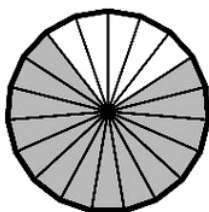
$\frac{10}{13}$



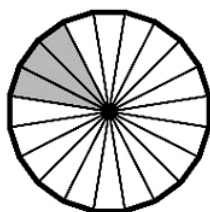
$\frac{11}{14}$



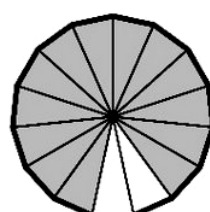
$\frac{3}{12}$



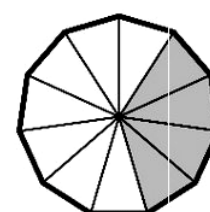
$\frac{14}{19}$



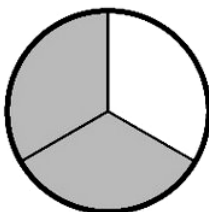
$\frac{3}{20}$



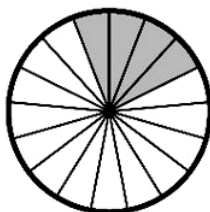
$\frac{13}{15}$



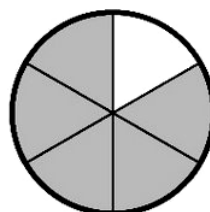
$\frac{4}{11}$



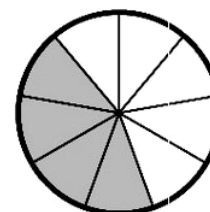
$\frac{2}{3}$



$\frac{4}{17}$



$\frac{5}{6}$



$\frac{4}{9}$