

nombre _____

curso _____

fecha _____

Pauta Identificar ángulos D

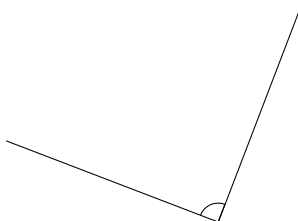
Observe y escriba el nombre del ángulo que representa



obtuso




recto



recto



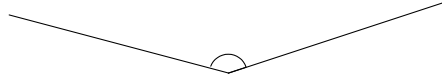
agudo



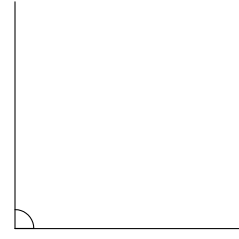
obtuso



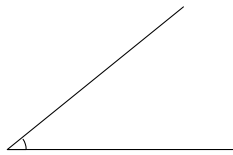
recto



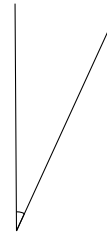
obtus



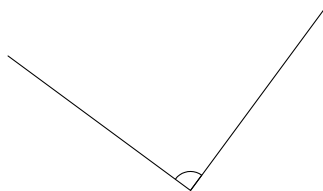
recto



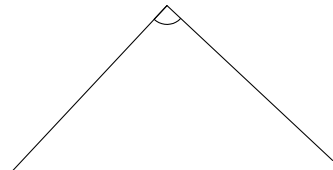
agudo



agudo



recto



recto