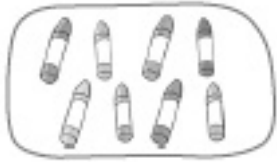


DÍA 16: CONTAMOS OBJETOS HASTA 10.

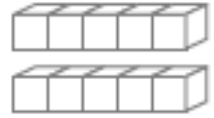
Une:



.

6

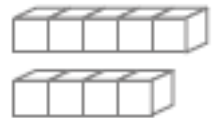
.



.

7

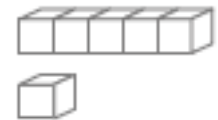
.



.

8

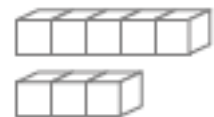
.



.

9

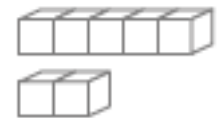
.



.

10

.



Escribe:

6	7	8	9	10